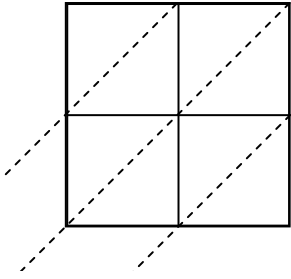


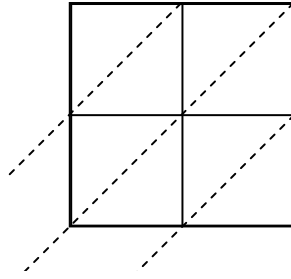


Use lattice multiplication to solve each problem.

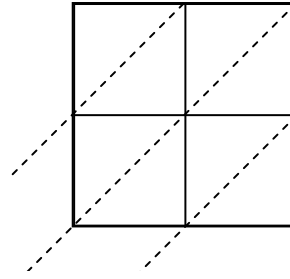
1)  $96 \times 32 =$



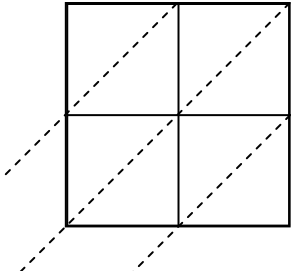
2)  $69 \times 54 =$



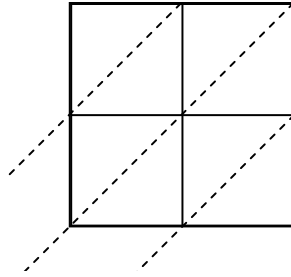
3)  $97 \times 28 =$



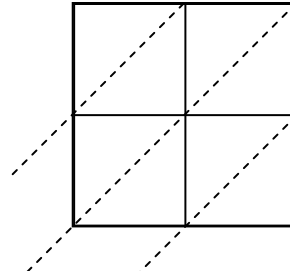
4)  $75 \times 91 =$



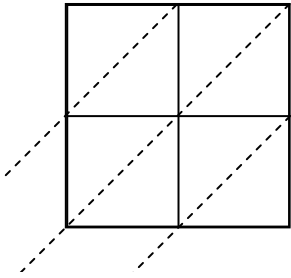
5)  $48 \times 79 =$



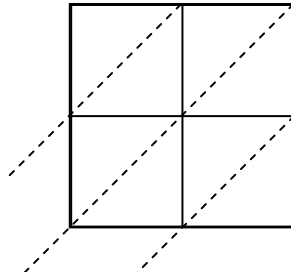
6)  $56 \times 73 =$



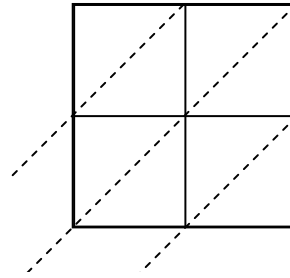
7)  $45 \times 69 =$



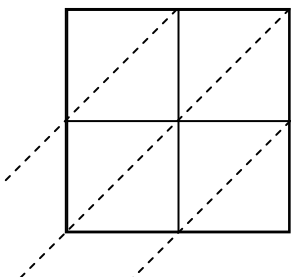
8)  $84 \times 45 =$



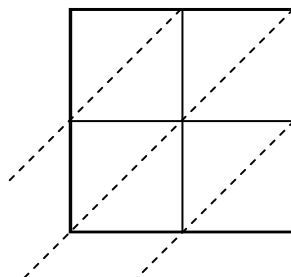
9)  $29 \times 41 =$



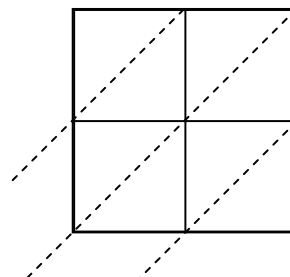
10)  $45 \times 24 =$



11)  $93 \times 59 =$



12)  $57 \times 39 =$



**Answers**

1. \_\_\_\_\_

2. \_\_\_\_\_

3. \_\_\_\_\_

4. \_\_\_\_\_

5. \_\_\_\_\_

6. \_\_\_\_\_

7. \_\_\_\_\_

8. \_\_\_\_\_

9. \_\_\_\_\_

10. \_\_\_\_\_

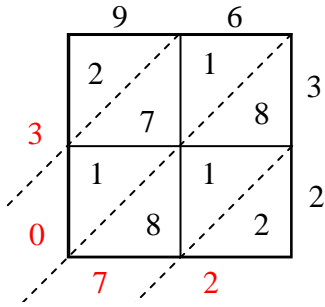
11. \_\_\_\_\_

12. \_\_\_\_\_

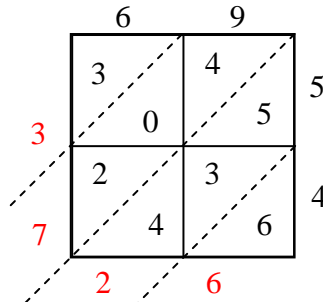


Use lattice multiplication to solve each problem.

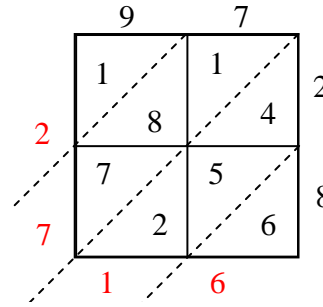
1)  $96 \times 32 =$



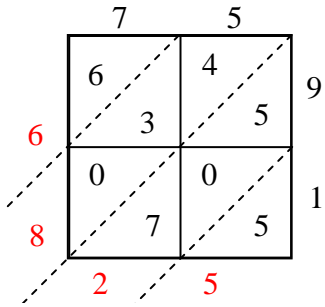
2)  $69 \times 54 =$



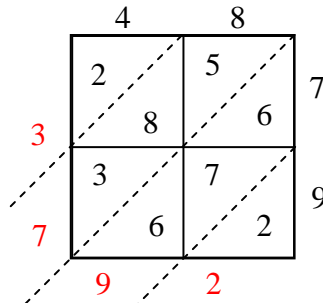
3)  $97 \times 28 =$



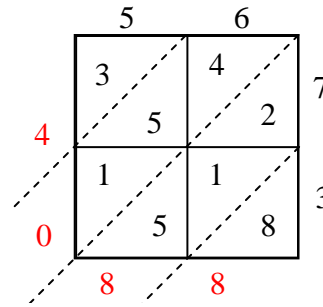
4)  $75 \times 91 =$



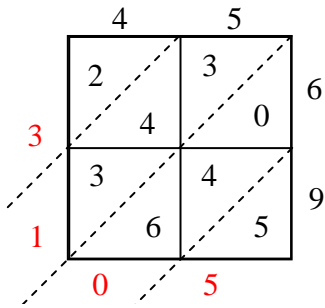
5)  $48 \times 79 =$



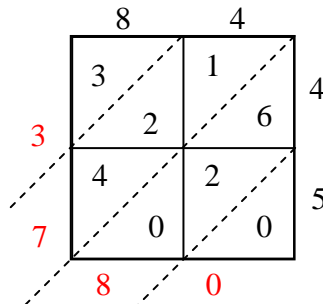
6)  $56 \times 73 =$



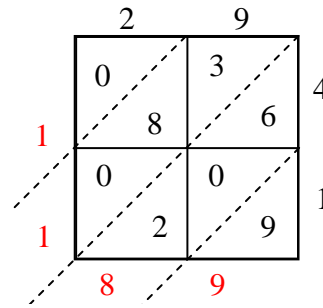
7)  $45 \times 69 =$



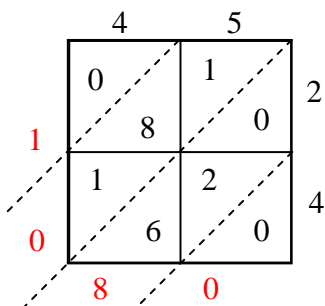
8)  $84 \times 45 =$



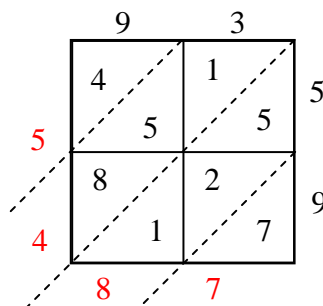
9)  $29 \times 41 =$



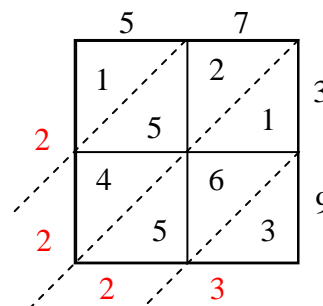
10)  $45 \times 24 =$



11)  $93 \times 59 =$



12)  $57 \times 39 =$



Answers

1. 3,072
2. 3,726
3. 2,716
4. 6,825
5. 3,792
6. 4,088
7. 3,105
8. 3,780
9. 1,189
10. 1,080
11. 5,487
12. 2,223